

Name

Hall Ticket No.

Name of the Invigilator

Signature

Maximum Marks : 100

STD-1 SEC

Time : 60 Minutes

Question 1 to 30 choose the best answer for each question and put a tick (✓) in the box against your choice.

1. What kind of food should we eat?

a) fast food ☐

b) vegetarian food ☐

c) clean and fresh food ☐

d) non-vegetarian food ☐

2. We make clothes using the following fibres, which of these is a man made fibre?

a) cotton ☐ b) silk ☐

c) nylon ☐ d) wool ☐

(1)

3. How does water in the rivers and ponds become unfit for drinking?

a) washing dirty clothes ☐

b) bathing cattle ☐

c) throwing rubbish into water ☐

d) all the above ☐

4. Peas, Beans and grams are commonly called

a) seeds ☐ b) cereals ☐

c) pulses ☐ d) nutes ☐

5. The animals which live both on land and in water are called

a) reptiles ☐ b) amphibians ☐

c) aquatic animals ☐ d) land animals ☐

6. The days are long and nights are short in

a) summer ☐ b) winter ☐

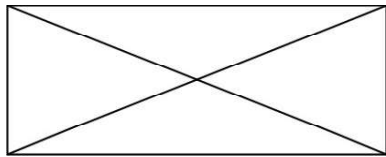
c) spring ☐ d) autumn ☐

7. One of the following is different from the others in shape. Which one is it?

(2)

- a) football court ☐ b) badminton court ☐
 c) chess board ☐ d) volleyball court ☐

8. How many triangles are there in the picture below?



- a) 4 ☐ b) 3 ☐
 c) 6 ☐ d) 8 ☐

9. Which of the following is a healthy habit?

- a) drinking plenty of soft drinks ☐
 b) eating food whenever you like ☐
 c) eating lot of sweets daily ☐
 d) drinking plenty of clean water ☐

10. The earth's movement around the sun is called.....

- a) revolution ☐ b) rotation ☐
 c) gravitation ☐ d) motion ☐

11. Change of seasons is caused by

- a) earth's gravitational power ☐

- b) earth's revolution around the sun ☐
 c) moon's revolution around the earth ☐
 d) moon's revolution around the sun ☐

12. Who among the following got the Nobel Prize for her work for the welfare of the poor and the sick?

- a) Mother Teresa ☐ b) Annie Besent ☐
 c) Sarojini Naidu ☐ d) Medha Patkar ☐

13. Who among the following was a world famous Hindu Saint and Philosopher?

- a) Swami Vivekanand ☐
 b) Acharya Vinobha Bhave ☐
 c) Tulsidas ☐
 d) Muthuswami Dikshitkar ☐

14. Which of the following is celebrated at the end of fasting for a month?

- a) Id-ul-fitre ☐ b) Id-ul-Zuha ☐
 c) Muharram ☐ d) Milad-i-Sheriff ☐

15. Meaningful words by using the following letter 'Forest'

Ans. _____

16. Meaningful words by using the following letter 'Teacher'

Ans. _____

17. Meaningful words by using the following letter 'Father'

Ans. _____

18. Meaningful words by using the following letter 'Behind'

Ans. _____

19. Meaningful words by using the following letter 'Beetroot'

Ans. _____

20. Meaningful words by using the following letter 'Elephant'

Ans. _____

21. I had 75 paise. I spent 25 paise. Now I have.....paise left

a) 50 paise b) 65 paise

c) 35 paise d) 45 paise

22. October is the.....month of the year?

a) 7th b) 6th

c) 10th d) 9th

(5)

23. These are two basket of apples. One basket has 30 apples and the other has 24 apples. How many apples are there in all?

a) 55 b) 54

c) 64 d) 63

24. There are 9 ducks in a pond. 3 swim away. How many ducks remain?

a) 9 b) 3

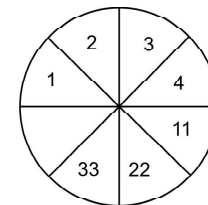
c) 7 d) 6

25. Counting in 5's

a) 8, 13, _____

b) 5, 10, _____

26. Fill in the blanks :



a) 54 b) 44

c) 34 d) 24

(6)

27. Count the total oranges on the branches.



- a) 9 b) 12
c) 15 d) 18

28. Colour the fourth and the tenth balloon blue.



29. Rs. 1 + Rs. 5 + 50 paise =

- a) Rs. 5.50 paise b) Rs. 6.50 paise
c) Rs. 4.50 paise d) Rs. 7.50 paise


30. Mohan plays from 7A.M to 8.30 A.M. He plays for _____ hour _____ minutes

- a) 2 hour and 30 minutes
b) 1 hour and 30 minutes
c) 3 hour and 30 minutes

d) 4 hour and 30 minutes

31. Colour the picture

8



N.B. : 2 marks for neatness.